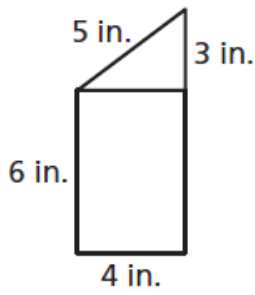
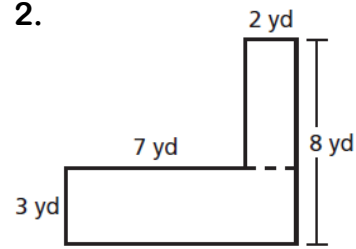


Find the perimeter of the figure. Round to the nearest hundredth if necessary.

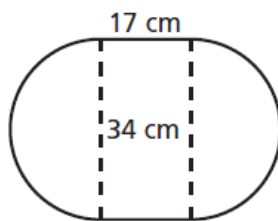
1.



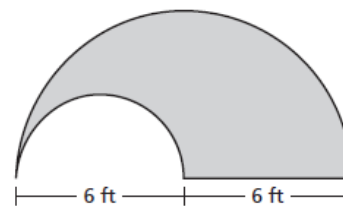
2.



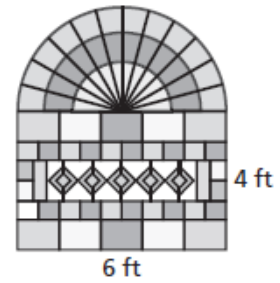
3.



4.



5. A stained glass window has the dimensions shown. What is the perimeter of the hole that should be cut in the wall in order for the window to be installed?



6. A school has a garden in the shape of a pencil. A fence needs to be built around the garden. The fence costs \$2.75 per foot. How much will it cost to install the fence?

